

Notebook



Name: _____

Date: _____



Northwest

Lesson 1 worksheet

1. In the box below, list or draw a picture of different types of transport you have travelled on.

2. Cut out the pictures from the next page and glue them in the correct place.

Sea

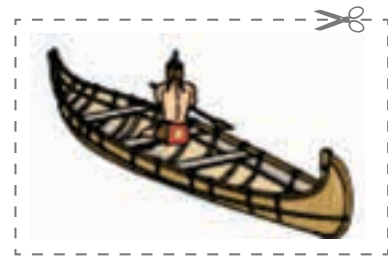

Air

Land



Northwest

Lesson 1 worksheet



Northwest

Lesson 2 worksheet

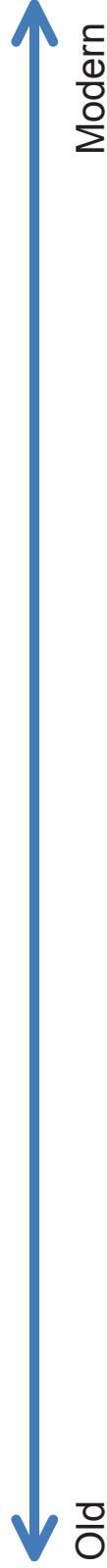
How has transport changed?

1. Draw or glue pictures to show how transport has changed.

Land



Sea



Lesson 2 worksheet

Air



2. Circle the words that describe each type of transport.



Safe

Comfortable

Fast

Can transport many people



Safe

Comfortable

Fast

Can transport many people



Safe

Comfortable

Fast

Can transport many people



Northwest

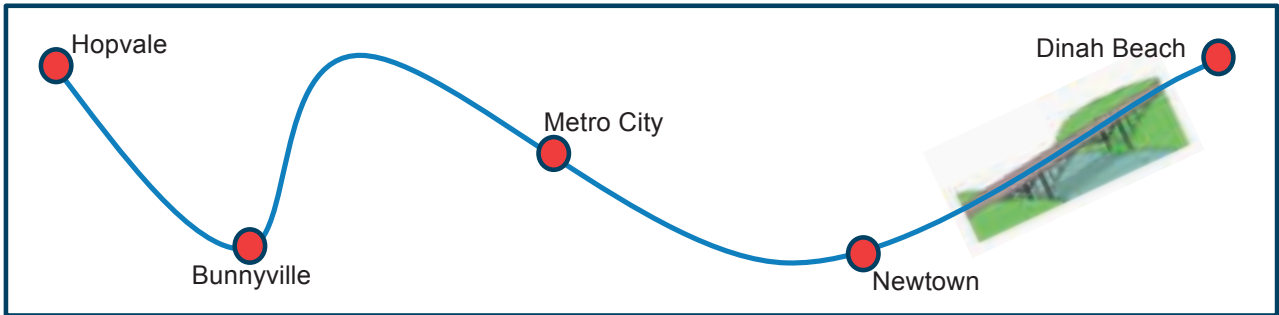
Lesson 2 worksheet

Examples of images which could be used.



Lesson 3 worksheet

Trace over the train track, then draw a circle around the stations.



Circle and write what this machine is used for.



This machine is for _____

Timetable	
9.00	Hopvale
9.30	Bunnyville
10.00	Metro City
10.30	Newtown
11.00	Dinah Beach

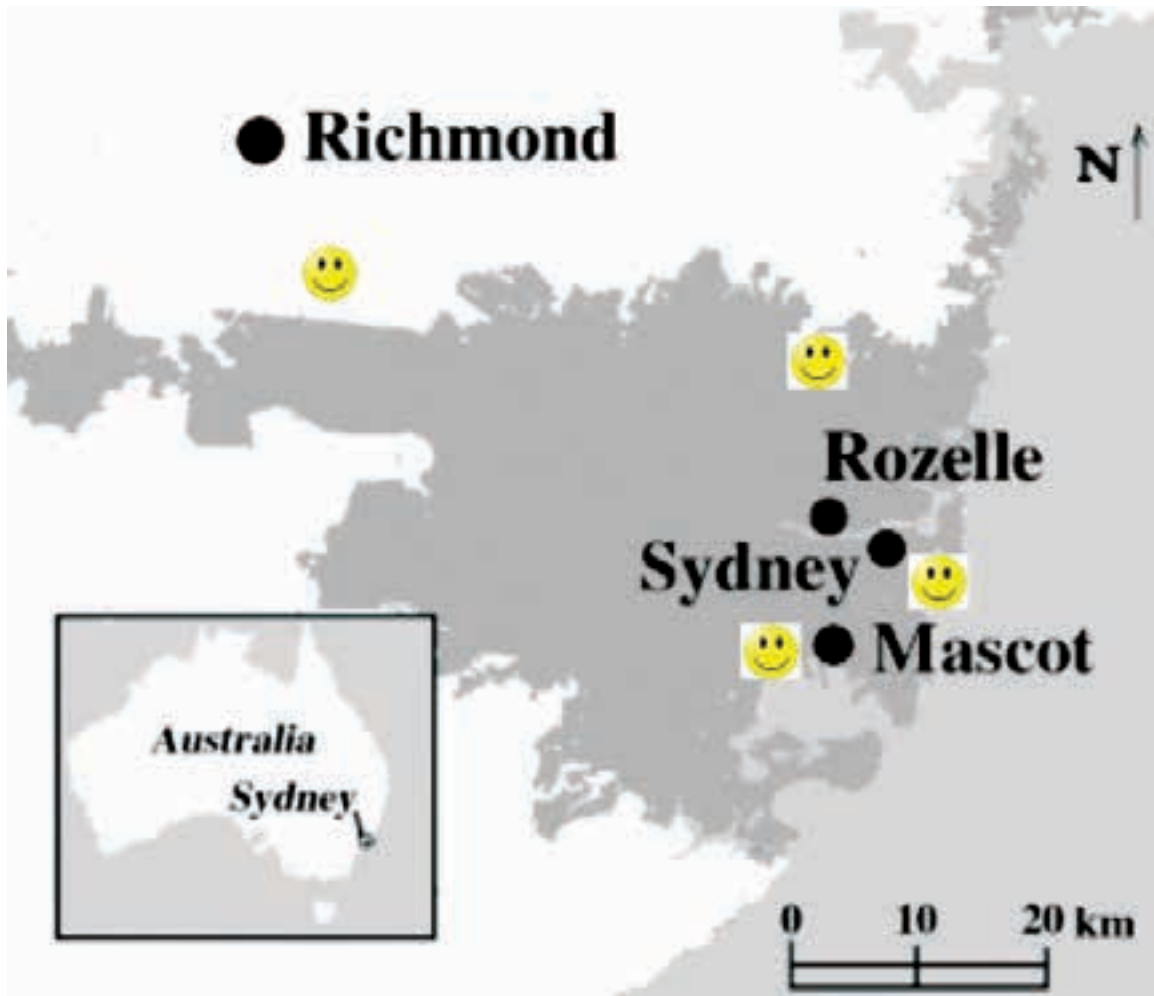
1. What time does the train leave Hopvale? _____
2. Which station does it go to next? _____
3. What time does the train get to Newtown? _____
4. How long does it take to get from Hopvale to Metro City? _____



Northwest

Lesson 4 worksheet

Draw more 😊 to show where people live in the Sydney basin.



Map of Sydney from website <http://www.sciencedirect.com/science/article/pii/S0048969707003397>

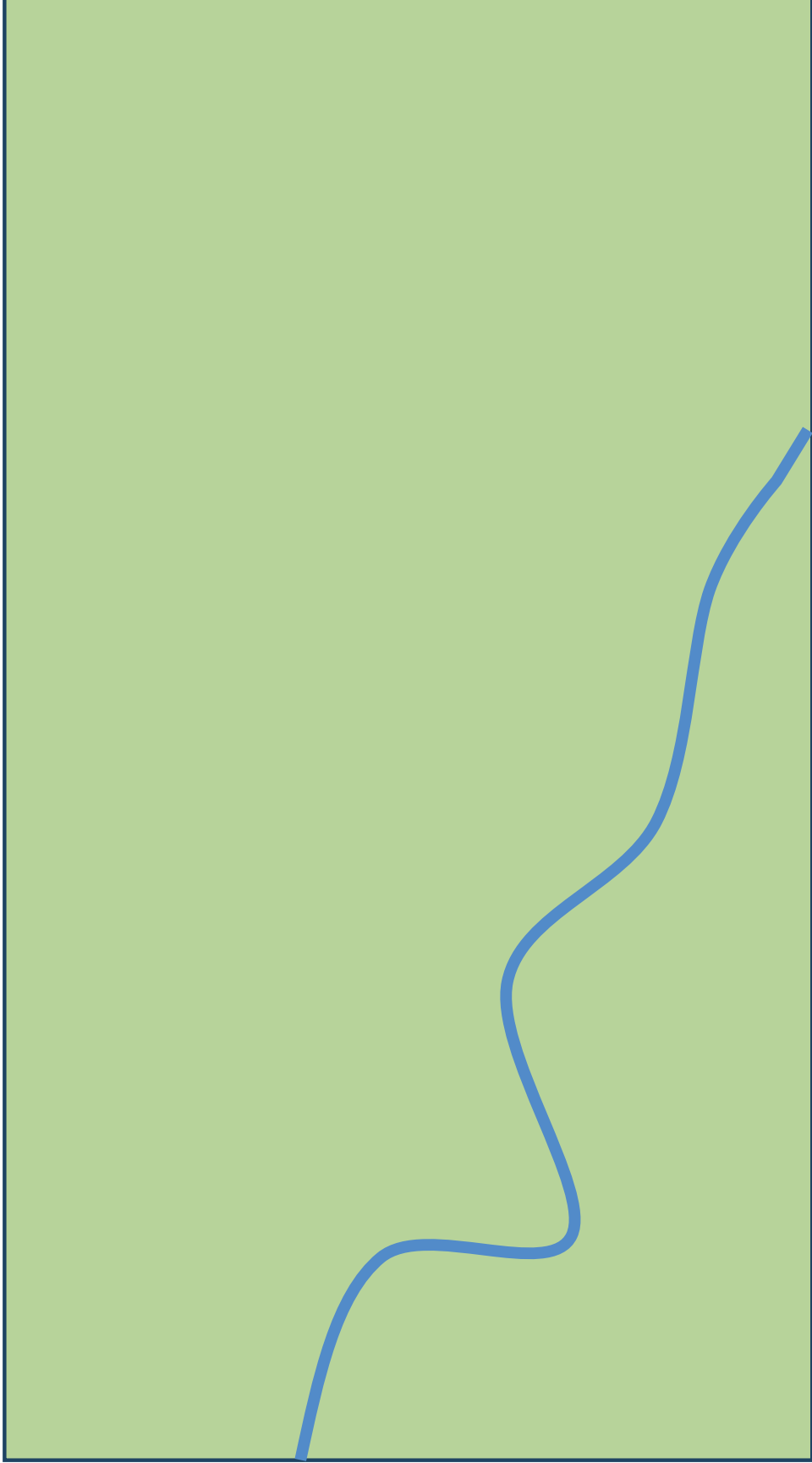
Make a list of some of the benefits of having a railway to the North West region.



Northwest

Lesson 5 worksheet

In the space below, draw your own map of a railway. You will need to include: some stations, car parks, bus stops, tunnels, bridges, shopping centres, etc.



Northwest

Lesson 6 worksheet – Assessment task

On the map below, draw a railway line that will enable people to get to important places. You will need to include at least two stations and some of the other features we have discussed in this term. Remember to label your diagram.

Sporting Fields

City and workplaces

Suburban housing

Endangered animals

Lesson 6 worksheet

2. Put a circle around land transport.



3. Number these pictures 1 – 4 from oldest to newest.



4. List some things you would see on a railway system.

5. Why does Sydney need Sydney Metro Northwest?

6. What are some of the things the Government need to consider when building Sydney Metro Northwest?



Northwest